

Name: Kelly
Period: 7 Date: _____

All Types of Equations WS_L & K

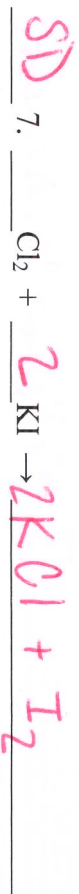
Identify the following equations as S, D, SD, DD or C. Balance using coefficients.

Type



Identify the type and complete the following

Type



Name: _____
Period: _____ Date: _____

All Types of Equations WS_L & K

Identify the following equations as S, D, SD, DD or C. Balance using coefficients.

Type



Identify the type and complete the following

Type



Each of the following equations is "balanced" incorrectly. Find the error and balance it again.



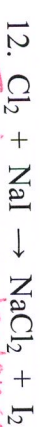
missing an H₂ and O. Disproportionately balanced



The 2 subscripts should be as coefficients



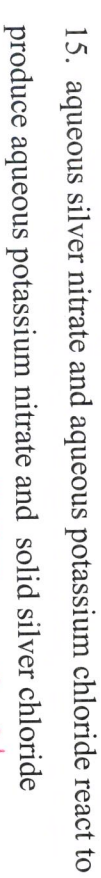
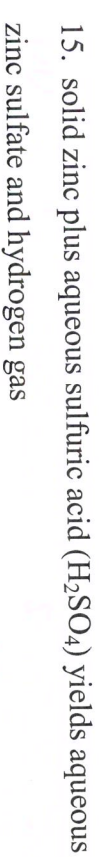
H is not balanced, N is diatomic



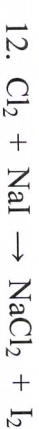
I is not balanced, Cl is not correct



Write the formulas for following equations:



Each of the following equations is "balanced" incorrectly. Find the error and balance it again.



Write the formulas for following equations:

